

Unit 7 TEST Name/Class _____

1 Indicate whether the distance between the notes of each pair is a whole step (W) or half step (H).

a. 

b. 

1-20

2 Write tetrachords starting on the following notes. Use accidentals as needed.

a. 

b. 

c. 


d. 


e. 


f. 


3-18


3 Write major scales that begin on the following notes. Use quarter notes. Be sure to include any accidentals.

a. 

b. 

c. 

d. 

e. 

7-35

4 Name the following major key signatures.

a.  b.  c.  d. 

3-12

5 Write the following major key signatures.

a.  F major b.  D major c.  C major d.  B \flat major e.  G major

3-15

100